

8LP
3.4B

What Do You Get When You...

1. Cross two ducks with a match?

Answer:

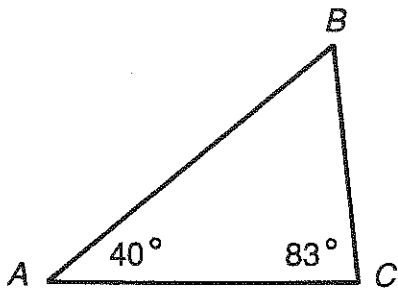
37° 57° 99° 67° 104° 76° 59° 113° 42° 53° 67° 99° 18°

2. Cross a stick of dynamite with a lemon pie?

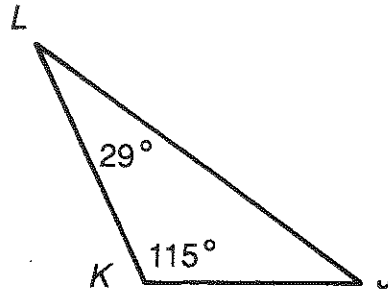
Answer:

113° 68° 63° 34° 34° 54° 38° 54° 67° 99° 57° 90° 36° 59° 67°

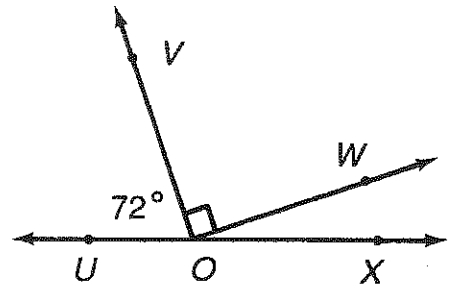
Find the angle measures indicated. Look for each answer in the code. Each time the answer appears, write the letter of the exercise above it.



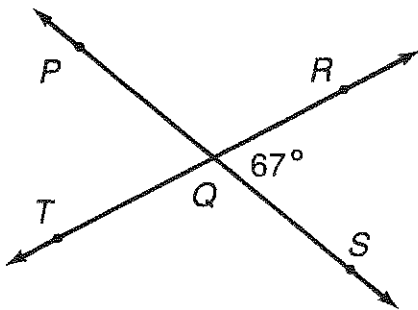
(I) $m\angle B =$



(G) $m\angle J =$

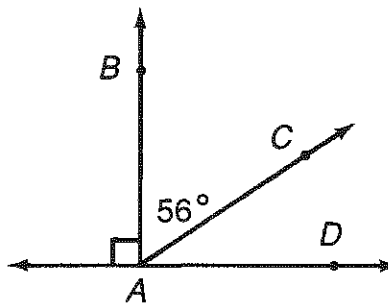


(S) $m\angle WOX =$



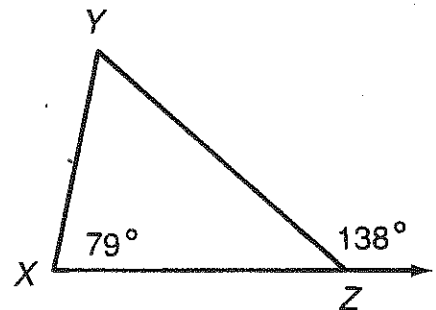
(A) $m\angle PQR =$

(E) $m\angle PQT =$



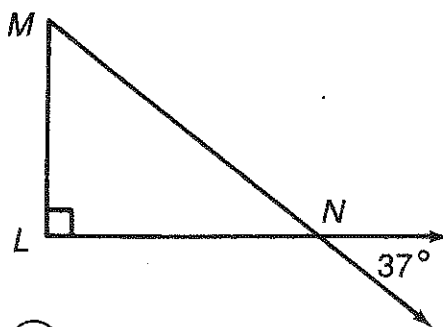
(N) $m\angle DAB =$

(O) $m\angle DAC =$



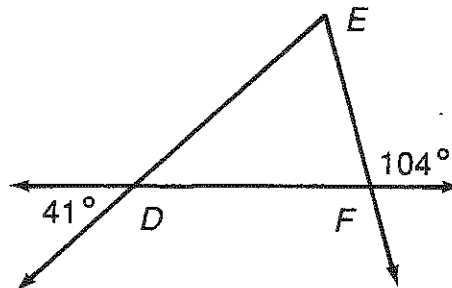
(C) $m\angle XZY =$

(U) $m\angle Y =$



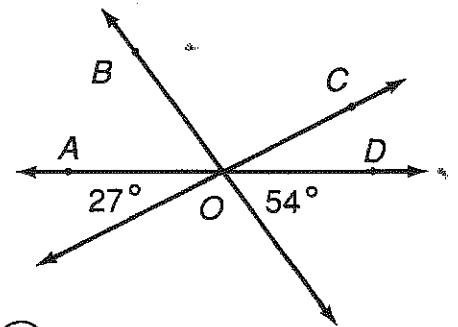
(F) $m\angle MNL =$

(K) $m\angle M =$



(Q) $m\angle EFD =$

(B) $m\angle E =$



(M) $m\angle AOB =$

(R) $m\angle BOC =$